

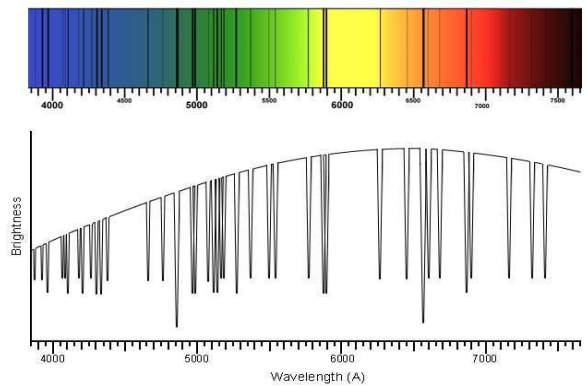
HOW TO CLASSIFY STARS WITH SPECTRA

ENGAGE

1. What physical characteristics make stars more likely to harbor an orbiting planet with complex life on it?

2. How do we look for stars with these life-supporting characteristics?

3. Define the terms **star spectra** and **spectral absorption lines**. What can we learn about star characteristics by studying them? Try to guess!



EXPLORE

Part A: Compare star spectra to classify 14 stars.

1. Form a team as directed.
2. Open the following database of star spectra that has been curated by the Sloan Digital Sky Survey: <http://voyages.sdss.org/expeditions/expedition-to-the-milky-way/spectral-types/classifying-stars/>. You can access this link on a device or use a handout instead.
3. Scroll down the webpage to find a table with 14 stars (in two columns of seven) in it. This is what the top of the table looks like:

Plate	Fiber	Plate	Fiber
266/51630	346	266/51630	173
266/51630	275	266/51630	314
266/51630		266/51630	

4. Each blue hyperlink (a “fiber” number) opens an information page for a given star. Scroll down the star’s page to find its spectrum. Your goal is to sort the 14 stars into star groups using features of the spectra. What features in the spectra will you use for sorting? Brainstorm with your partner(s) as you look at the first stars in the database.
5. As you study the spectra, sort them into groups. Develop a process (consider taking notes or drawing pictures) to organize your team’s work. Create as many star groups as you need. Different groups can have a different number of stars in them. For a very unusual spectrum, it is okay to make a one-star group, but it is better to carefully look for shared features in other spectra and group it. Use a table like the one on the next page to record your classification. There is no correct number of groups, so you might not use every row in the table. Give each group of stars a name.

CLASSIFICATION OF 14 STARS BY THEIR SPECTRA: OUR TEAM

Stars in Group	Characteristics of Stars in this Group	Name for the Star Group

6. In a paragraph, summarize the process you used to classify the stars into groups.

Part B: Compare Star Classifications

As directed, partner with another team to compare your classification systems. First, spend a few minutes comparing your classifications with your partnered team's classifications.

Next, take notes while you discuss the following questions with your partnered team.

7. Which team created fewer star groups? Is it better to have more groups or fewer groups?

8. List the stars that are grouped together in both classification schemes.

9. What feature(s) of the spectra did the other team focus on to sort the stars?

Next, work with your partnered team to create a consensus classification that both teams are willing to accept. Make a table or a diagram to document this classification. Try to make a figure explains your grouping process to other groups without you explaining it.

10. Was it difficult for both teams to agree on this consensus classification? Why or why not?

11. What strategies did your combined group use to discuss differences and build consensus?

12. Would it be easier to classify stars into groups if you had additional information about the stars? If so, what else do you want to know about the stars?

13. Do you think teams of scientists that first classified stars compared results with other teams before reaching their final classification scheme?

14. In general, when and how should scientists compare their results with those from other scientists?

EXPLAIN

Part A: How do Astronomers Classify Stars?

Like your classification, the OBAFGKM classification system sorts stars using star spectra. Each letter (O, B, A, F, G, K, and M) is a label for a different group of stars. Key spectral lines and the specific elements responsible for making them are shown in Tables A1 and A2. The correlation of these star groups with star temperatures is also shown in Table A2.

Element Creating Spectral Line	Wavelength of Spectral Line (Angstroms)
Helium, Ionized	4400
Helium, Neutral	4200
Hydrogen Atom (H_{α} , H_{β} , H_{γ})	6600, 4800, 4350
Ionized Calcium (Ca)	3800-4000
Sodium (Na)	5800
Titanium Oxide (O)	Lots of lines 4900 - 5200, 5400 - 5700, 6200 - 6300, 6700 - 6900

Table A1. Absorption lines in star spectra

The table below shows some of the characteristic absorption and emission lines of each star.

Spectral Type	Temperature (Kelvin)	Spectral Lines
O	28,000 – 50,000	Ionized helium
B	10,000 – 28,000	Helium, some hydrogen
A	7500 – 10,000	Strong hydrogen, some ionized metals
F	6000 – 7500	Hydrogen, ionized calcium (labeled H and K on spectra) and iron
G	5000 – 6000	Neutral and ionized metals, especially calcium; strong G band
K	3500 – 5000	Neutral metals, sodium
M	2500 – 3500	Strong titanium oxide, very strong sodium

Table A2. Characteristics of OBAFGKM stars

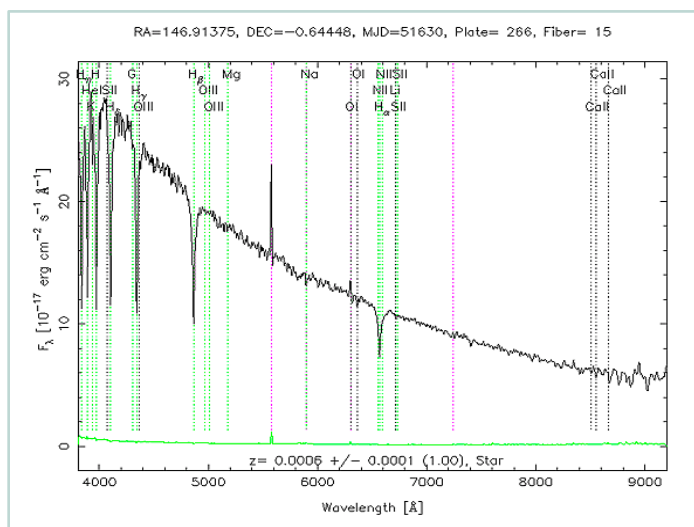


Figure A3. Spectrum of a star (not the Sun)

Our Sun is classified as “G” type. Use the data shown in Figures A1–A3 to answer the following questions about the Sun.

A1. Look at Table A2. What range of surface temperature is expected for the G-type Sun?

A2. Look at Table A2. What spectral lines are characteristic of absorption in G-type spectra?

A3. According to Table A1, **ionized calcium** absorbs 3800-4000 Angstrom light. Is ionized calcium absorption expected in the G-type Sun spectrum? Why or why not?

A4. According to Table A1, what wavelengths of light are absorbed by **helium**?

A5. Based on Table A2, are spectral lines from helium absorption expected in the G-type Sun spectrum? Why or why not?

Figure A3 shows a spectrum for another star (not the Sun). Refer to this spectrum, as well as Table A1 and A2, to answer the following questions:

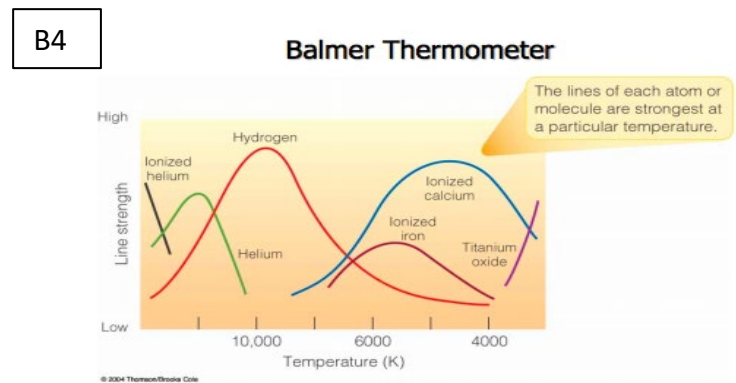
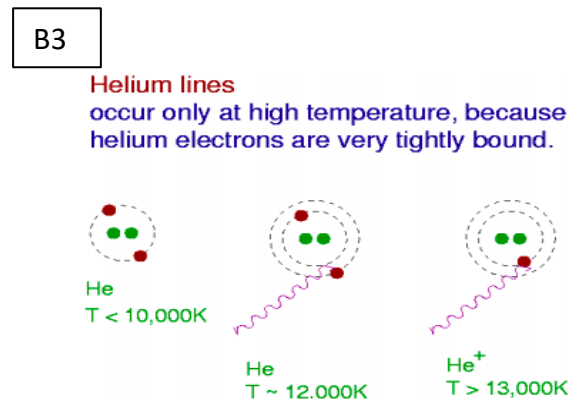
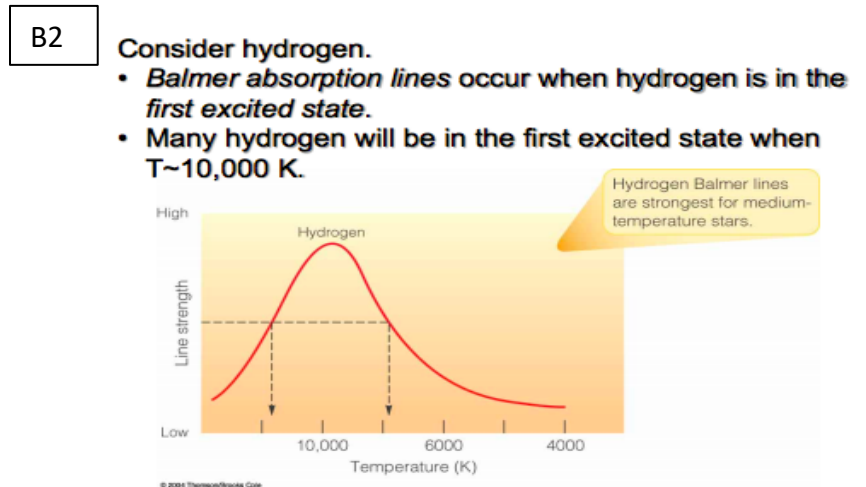
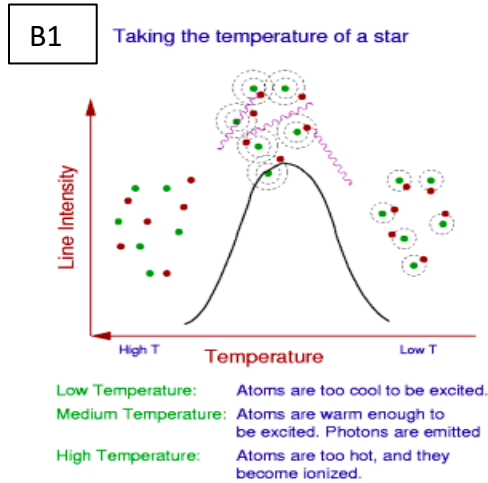
A6. List the wavelengths of the seven strongest absorption lines (dips) in the Figure A3 spectrum.

A7. Referring to Table A1, identify the elements that cause the strong absorption lines you noted in the previous question.

- A8. Based on the elements you identified in the previous question, assign this star an “OBAFGKM” type.
- A9. Based on the assigned “OBAFGKM” type, predict a range of surface temperatures for this star.
- A10. Which star is expected to have a higher surface temperature, the Sun (G-type) or the star shown in Figure A3? Explain briefly.
- A11. How confident are you of the class and temperature range you assigned the star in Figure A3? Explain.
- A12. Is star temperature an important characteristic for finding stars that can support life? Why or why not?

EXPLAIN (continued)

Part B: Why Do Different Elements Absorb Better at Different Temperatures?



Images courtesy of Dr. Karen Leighly, University of Oklahoma

Refer to the figures above to help you answer the questions on the next page.

B1. To absorb light, electrons in atoms must become “excited”. In Figures B1 and B3, atoms (green dots) are shown with electrons (red dots) occupying different energy levels in a BOHR diagram (dotted rings). In Figures B1 and B3, draw squares around atoms with excited electrons.

B2. According to Figure B2, at what star temperature does hydrogen best absorb light?

B3. True or false? According to Figure B4 and compared with hydrogen, helium best absorbs light in relatively hot stars. Justify your answer.

B4. True or false? Table A2 also indicates that helium absorbs better in relatively hot stars.

B5. Compared with hydrogen, why does helium absorb better at higher temperatures? (Two hints: this is shown in the figures, and helium is a noble gas.)

$$T = 2.897 \times 10^{-3} \text{ m K} / \lambda_{\text{peak}}$$

8. Let's use the equation to study the Sun. The peak wavelength for the Sun is 5100 Angstroms.
- Convert the wavelength to meters ($1 \text{ m} = 1 \times 10^{-10}$ Angstroms) for use in the equation.
 - Calculate the predicted surface temperature of the Sun in Kelvin.
 - Compare the temperature you calculated with the equation to the expected surface temperature of G-type stars shown in Figure A2. Do the two measures agree?
 - The human eye can detect wavelengths from 380 to 700 nanometers. Is it a coincidence that the peak wavelength for the Sun (640 nm, 6400 Angstroms) is in this range?

EVALUATE

First, read the following NASA article on the connection between star types and habitable planets: "[Goldilocks Stars are the Best Places to Look for Life](https://www.nasa.gov/feature/goddard/2020/goldilocks-stars-are-best-places-to-look-for-life)" (<https://www.nasa.gov/feature/goddard/2020/goldilocks-stars-are-best-places-to-look-for-life>).

Then, use the 4-2-1 strategy to identify and discuss the most important ideas.

1. On your own, identify and write down the four most important ideas from the reading.

2. In pairs, share your ideas, and decide on the two most important ideas from the reading.

3. In groups of four, share your ideas, and decide on the most important idea from the reading.

Finally, write individually for 3-5 minutes to explain what you have learned from this activity and reading. Try to explain the reading to someone who isn't familiar with classifying stars.

Sources

Garner, R. (Ed.). (January 2020). *Goldilocks stars are best places to look for life*. NASA.

<https://www.nasa.gov/feature/goddard/2020/goldilocks-stars-are-best-places-to-look-for-life>

Investigating Astronomy. (n.a.). *Solar spectrum*. TERC. https://ia.terc.edu/spectral_solar_spectrum.html

SDSS. (n.d.) *Absorption and emission lines*. SDSS Voyages. <http://voyages.sdss.org/expeditions/expedition-to-the-milky-way/spectral-types/absorption-and-emission-lines/>