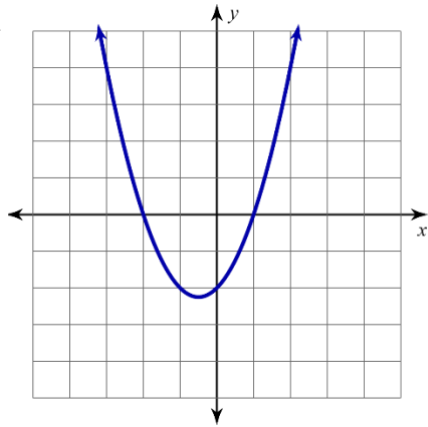


PERFECT PAIRINGS

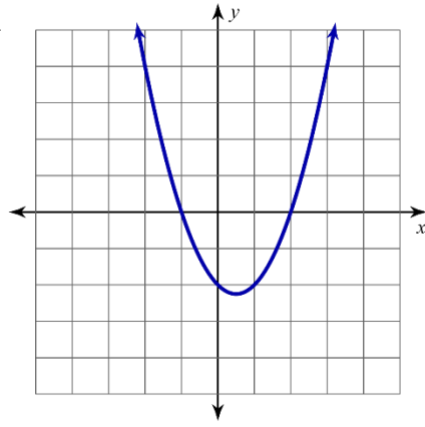
Matching

1) _____



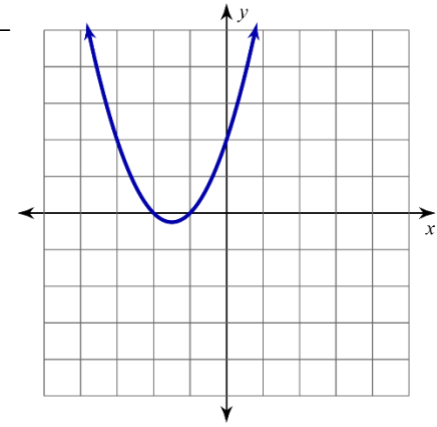
(A) $g(x) = (x+1)(x+2)$

2) _____



(B) $y = (x-1)(x+2)$

3) _____



(C) $f(x) = (x+1)(x-2)$

Making Predictions

What do you think the equation is for the following polynomial?

